

# FOREST BROOK INTERNATIONAL SCHOOL, DESURI

SESSION 2026-27

- NATURE TRAIL
- SUMMER ADVENTURE
- CAMPING

## SUMMER VACATION ASSIGNMENT

STUDENT'S NAME: \_\_\_\_\_

CLASS / SEC: \_\_\_\_\_

ROLL NO: \_\_\_\_\_

# SUMMER VACATION NOTICE

HAPPY HOLIDAYS!

1.



**HOLIDAYS HOMEWORK** for all subjects should be done in a **SEPARATE NOTEBOOK** (Keep it neat and clean!)

2.



**THE SCHOOL WILL REMAIN CLOSED** on 15.05.26 and **SUMMER BREAK** will commence from comened from 15.05.26 to 20.06.26

3.



**THE SCHOOL WILL REOPEN** on 21.06.26 as per usual time. (As per Govt. Order)



4.



**ALL THE ASSIGNMENTS** are to be submitted on 22.06.26.

5.



**DAILY ONE PAGE HINDI & ENGLISH CURSIVE WRITING** should be done in a **SEPARATE NOTEBOOK** (Practice beautifully!)



# All About Me

- Hello everyone, my name's \_\_\_\_\_
- I'm \_\_\_\_\_ years old.
- My hometown is \_\_\_\_\_
- My birthday is on \_\_\_\_\_
- I'm a student at \_\_\_\_\_
- My favorite color is \_\_\_\_\_
- There are \_\_\_\_\_ people in my family.
- My father is a \_\_\_\_\_
- My mother is a \_\_\_\_\_
- In the future I want to be a \_\_\_\_\_
- My favorite sport is \_\_\_\_\_
- My hobbies are \_\_\_\_\_
- My favorite food is \_\_\_\_\_
- My favorite drink is \_\_\_\_\_
- My favorite book is \_\_\_\_\_
- My favorite movie is \_\_\_\_\_

## Subject – E.V.S.

(Write and learn this work in e. v. s notebook)

### I. Fill in the blanks...

- (i) My name is \_\_\_\_.
- (ii) I am \_\_ years old.
- (iii) My father's name is \_\_\_\_.
- (iv) My mother's name is \_\_\_\_.
- (v) My favourite fruit is \_\_\_\_.

### II. What do you call the following relatives?

- (i) Mother's mother \_\_\_\_
- (ii) Father's sister \_\_\_\_
- (iii) Mother's sister \_\_\_\_
- (iv) Mother's sister's husband \_\_\_\_
- (v) Mother's brother \_\_\_\_
- (vi) Father's father \_\_\_\_

### III. Match the Column...

#### Column A

- (i) Grandparents
- (ii) Single parent family
- (iii) Eating together
- (iv) Mother's mother

#### Column B

- (i) A type of family
- (ii) Parents of your parents
- (iii) Nani
- (iv) Custom

### IV. Answer the following questions.

- (i) What is a nuclear family?
- (ii) What type of family is yours?
- (iii) Name the first school of every child?
- (iv) A group of people who are related to each other.
- (v) Name a family where children, parents, grandparents, cousins, uncles and aunts live together.

---

## Subject – English

(Write and learn this work in English notebook)

### A. Match the following:

- 1. She is eating an                      naughty girl
- 2. This is a                                easy exercise
- 3. This is an                              new book
- 4. You are a                                apple

**B. State True or False:**

1. Krishna went to the other side of the hill alone. ( )
2. The name of Krishna's friend was kaveri. ( )
3. On the other side of the hill, Krishna saw small heets. ( )

**C. Short answer questions:**

1. What did the poor children have lunch?
2. How did the principle react when krishna approached him for help?
3. Were the poor children able to get food and free education? (Yes /No)

---

**Subject – Hindi**

*(Write and learn this work in Hindi Grammar notebook)*

- 1..दो प्रार्थना पत्र
- 2..तीन निबंध ( दिवाली , होली, रक्षाबंधन )
- 3..दो पत्र (बधाई पत्र और मोहल्ले मे सफाई हेतु )
- 4.कोई दो कहानी किताब से

---

**Subject – Computer**

*(Write and learn this work in Computer notebook)*

**Q1. Fill in the blanks**

**(Software, Monitor, 104, GUI, Start button)**

- a) A set of instructions given to a computer to perform a task is called \_\_\_\_.
- b) The total number of keys in a standard QWERTY keyboard is \_\_\_\_\_.
- c) A \_\_\_\_\_ is also known as a Visual Display Unit (VDU).
- d) The \_\_\_\_\_ is a round button with the Windows logo on it.
- e) Windows has \_\_\_\_\_.

**Q2. Tick (✓) True or False**

- a) Windows 7 is developed by Linux
- b) Press WinKey + R key on the keyboard to open the Run dialog box
- c) LCD is a type of speaker
- d) Microsoft Word is system software
- e) System software includes operating systems

Q3. Tick (✓) the correct answer..

a) Which one of the following is a pointing device?

- i) Mouse    ii) RAM    iii) Monitor    iv) Microphone

b) Memory unit is a part of \_\_\_\_\_.

- i) Keyboard    ii) CPU    iii) Printer    iv) System Software

c) Chrome is an \_\_\_\_\_.

- i) System Software    ii) Application Software  
iii) External Hardware    iv) Internal Hardware

d) Which of the following is not a part of Desktop?

- i) Icon    ii) Taskbar    iii) System Tray    iv) Context Menu

e) The predecessor of Windows 7 was \_\_\_\_\_.

- i) Windows Vista    ii) Windows 8    iii) Windows XP    iv) Windows NT

Q4. Match the following (2½ marks)

A

B

- |              |                        |
|--------------|------------------------|
| a) Monitor   | i) Input device        |
| b) CPU       | ii) Output device      |
| c) Pen drive | iii) Processing device |
| d) Keyboard  | iv) Storage device     |

Q5. Answer the following questions (5 marks)

1. What does a computer system do?
2. Define input and output devices.
3. What is the purpose of the Start menu?
4. How can you apply a screen saver?
5. How can you create and remove an icon for MS Paint?

Subject – Math






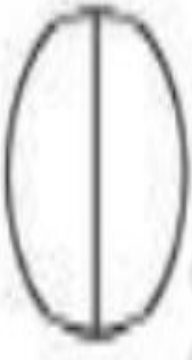
(Take a printout of the given photos and solve them.)

# International Place Value Chart


Periods →	Billions			Millions			Thousands			Ones		
Places →	HB	TB	B	HM	TM	M	HTh	TTh	Th	H	T	O
4520678												
25035078												
426877651												



4. Colour the shapes as given in the box :

 Color $\frac{2}{4}$	 Color $\frac{3}{4}$
 Color $\frac{2}{3}$	 Color $\frac{4}{5}$
 Color $\frac{3}{5}$	 Color $\frac{1}{2}$

# Ascending And Descending Order



These worksheets for Class 4 Maths, CBSE / NCERT / SCERT will improve your subject concept and improve your grades.

## Which is Smaller?

Identify and use the smaller or greater than symbol for your answer:

mm

110

>

cm

4

455

3

624

1

534

6

634

9

617

8

mm

110

cm

4

455

3

624

1

534

6

634

9

617

8

Convert the km into metre.

km

1

metre

1000

km

4.5

metre

\_\_\_\_\_

2

\_\_\_\_\_

5

\_\_\_\_\_

3

\_\_\_\_\_

5.2

\_\_\_\_\_

4

\_\_\_\_\_

8

\_\_\_\_\_

What is the fraction of the shaded part?



$\frac{1}{4}$



—



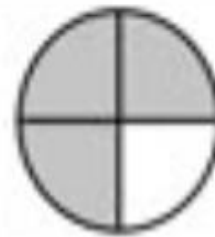
—



—



—



—




—



—



—



—

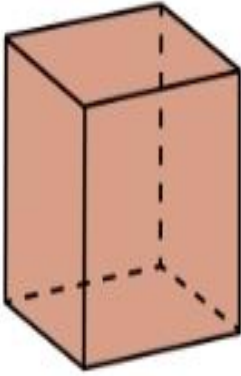


# Place Value

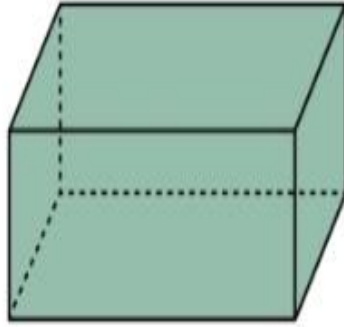
Directions: following the example, write the expanded form of the following numbers.

21214	$20000 + 1000 + 200 + 10 + 4$
57323	
67529	
72349	
98324	
23802	
42992	
52392	
86490	

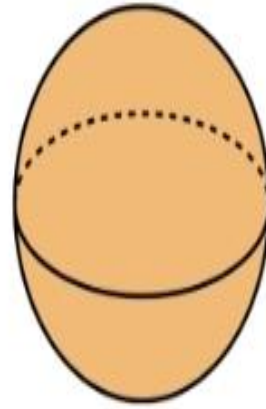
# 3D SHAPES



Cube



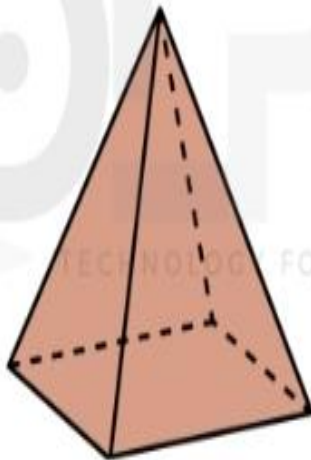
Rectangular  
Prsim




Sphere



Cylinder



Pyramid



Cone



